





1 Quels sont les dessins où les deux figures sont symétriques par rapport à la droite rouge ?
Si les deux figures ne sont pas symétriques, explique pourquoi.

Dessin 1





Explication :
.....
.....
.....

Dessin 2





Explication :
.....
.....
.....

Dessin 3



Explication :
.....
.....
.....

Dessin 4



Explication :
.....
.....
.....